



# Géométrie - Les segments


1. Mesure les segments ci-dessous:



[AB] mesure 5 cm.



[CD] mesure 3 cm et 5 mm




[EF] mesure 8 cm.



[GH] mesure 6 cm et 3 mm

2. Trace :

- un segment [IJ] qui mesure 7 cm:



- un segment [KL] qui mesure 12 cm:



- un segment [MN] qui mesure 4 cm et 5 mm:



- un segment [OP] qui mesure 8 cm et 7 mm:

